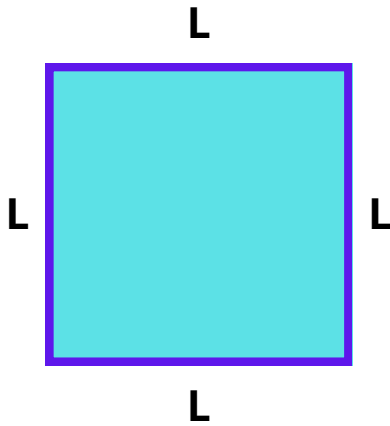


PERIMETRO E AREA

- QUADRATO



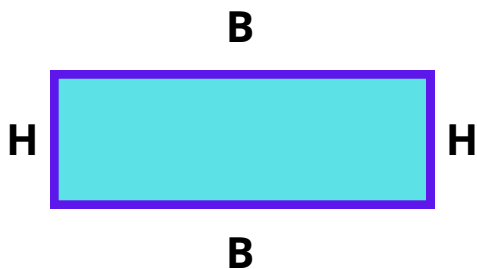
PERIMETRO:

$$P = L + L + L + L$$

AREA:

$$A = L \times L$$

- RETTANGOLO



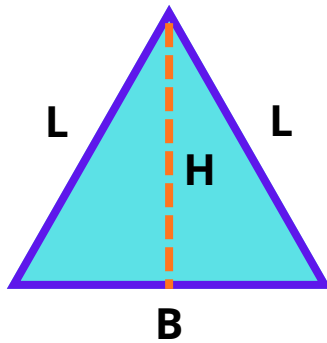
PERIMETRO:

$$P = H + B + H + B$$

AREA:

$$A = B \times H$$

- TRIANGOLO



PERIMETRO:

$$P = B + L + L$$

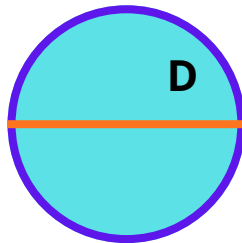
AREA:

$$A = B \times H : 2$$

- CERCHIO

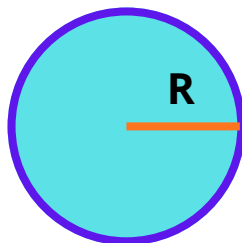
RICORDA!

$$\pi = 3,14$$



CIRCONFERENZA:

$$C = D \times \pi$$



AREA:

$$A = (R \times R) \times \pi$$